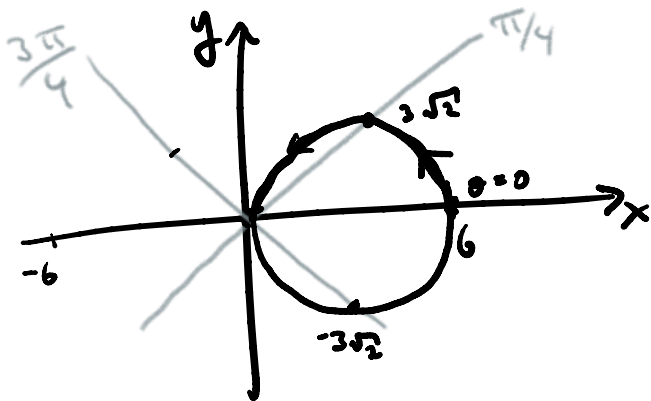


Problem 1:

$$r = 6 \cos \theta.$$



$\theta$	$r$
0	6
$\pi/4$	$6 \cdot \frac{\sqrt{2}}{2} = 3\sqrt{2}$
$\pi/2$	0
$3\pi/4$	$6 \cdot (-\frac{\sqrt{2}}{2}) = -3\sqrt{2}$
$\pi$	

Convert to rectangular: first multiply both sides by  $r$ .

$$\underbrace{r^2}_{=x^2+y^2} = 6 \underbrace{r \cos \theta}_{=x}$$

$$\boxed{x^2 + y^2 = 6x.}$$

Problem 2:

Double angle identity  $\cos(2x) - 3\cos(x) = -2.$

$$2\cos^2(x) - 1 - 3\cos(x) = -2$$

$$2\cos^2(x) - 3\cos(x) + 1 = 0.$$

Quadratic formula:

$$\cos(x) = \frac{+3 \pm \sqrt{9 - 4(2)(1)}}{4}$$

$$\cos(x) = \frac{- \dots}{4}$$

$$= \frac{3 \pm \sqrt{9-8}}{4}$$

$$\cos(x) = \frac{3 \pm 1}{4}$$

$$\cos(x) = \frac{4}{4} \quad \text{or} \quad \cos(x) = \frac{2}{4}$$

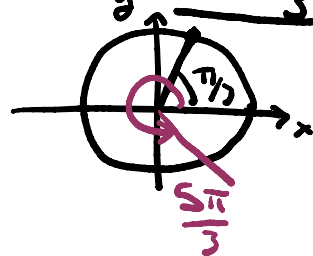
$$\cos(x) = 1$$

$$\boxed{x = 0 + 2\pi k}$$

$$\cos(x) = \frac{1}{2}$$

$$\text{or } \boxed{x = \frac{\pi}{3} + 2\pi k}$$

$$x = \frac{5\pi}{3} + 2\pi k.$$



Problem 3:

$$z = 2(\cos(30^\circ) + i\sin(30^\circ)).$$

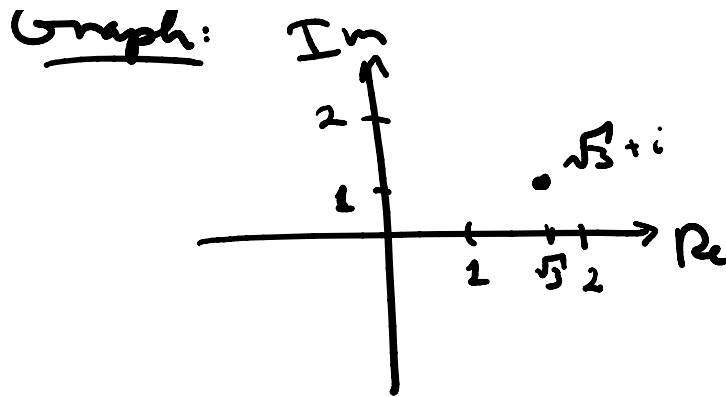
Use unit circle:  $\cos(30^\circ) = \frac{\sqrt{3}}{2}$

$$\sin(30^\circ) = \frac{1}{2}$$

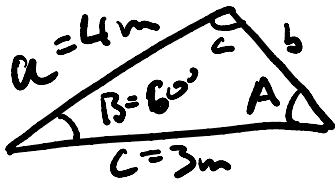
$$z = 2\left(\frac{\sqrt{3}}{2} + i \cdot \frac{1}{2}\right)$$

$$\boxed{z = \sqrt{3} + i.}$$

Graph:  $\text{Im}$   
↑



Problem 4:



use law of cosines &  
find b:

$$b^2 = a^2 + c^2 - 2ac \cos(B)$$

$$b^2 = 4^2 + 3^2 - 2 \cdot 4 \cdot 3 \cos(60^\circ)$$

$$= 16 + 9 - 24 \cdot \frac{1}{2}$$

$$b^2 = 25 - 12$$

$$\boxed{b = \sqrt{13}}$$

Then use law of sines to find A:

$$\frac{\sin A}{a} = \frac{\sin B}{b}$$

$$\frac{\sin A}{4} = \frac{\sin(60^\circ)}{\sqrt{13}}$$

$$\sin A = 4 \cdot \frac{\sqrt{3}}{2\sqrt{13}}$$

$$\sin A = 2\sqrt{\frac{3}{13}}$$

$$\boxed{A = \sin^{-1}\left(2\sqrt{\frac{3}{13}}\right)}$$

$$A = \sin^{-1}(2\sqrt{13})$$

Last find C with

$$A + B + C = 180^\circ$$

$$C = 180^\circ - B - A$$

$$= 180^\circ - 60^\circ - \sin^{-1}(2\sqrt{\frac{3}{13}})$$

$$C = 60^\circ - \sin^{-1}(2\sqrt{\frac{3}{13}})$$

Problem 5.

$$\vec{u} = \langle 1, 0 \rangle, \quad \vec{v} = \langle 2, 3 \rangle.$$

$$3\vec{u} - \vec{v} = 3\langle 1, 0 \rangle - \langle 2, 3 \rangle$$

$$= \langle 3, 0 \rangle - \langle 2, 3 \rangle$$

$$= \langle 1, -3 \rangle.$$

To find the unit vector, first find the magnitude:

$$|3\vec{u} - \vec{v}| = \sqrt{1^2 + (-3)^2}$$

$$= \sqrt{1+9}$$

$$= \sqrt{10}$$

Unit vector is

$$\frac{3\vec{u} - \vec{v}}{|3\vec{u} - \vec{v}|} = \frac{\langle 1, -3 \rangle}{\sqrt{10}}$$

$$\langle 1, -3 \rangle$$

$$\boxed{\left\langle \frac{1}{\sqrt{10}}, \frac{-3}{\sqrt{10}} \right\rangle}$$

Angle between  $\vec{u}$  &  $3\vec{u} - \vec{v}$ :

$$\vec{u} \cdot (3\vec{u} - \vec{v}) = |\vec{u}| |3\vec{u} - \vec{v}| \cos \theta.$$

First find dot product:

$$\begin{aligned} \vec{u} \cdot (3\vec{u} - \vec{v}) &= \langle 1, 0 \rangle \cdot \langle 1, -3 \rangle \\ &= 1 + 0 \\ &= 1. \end{aligned}$$

$$\begin{aligned} |\vec{u}| &= \sqrt{1^2 + 0^2} \\ &= 1 \end{aligned}$$

and  $|3\vec{u} - \vec{v}| = \sqrt{10}$  as just found.

Plugging these in:

$$1 = 1 \cdot \sqrt{10} \cos \theta$$

$$\cos \theta = \frac{1}{\sqrt{10}}$$

$$\boxed{\theta = \cos^{-1}\left(\frac{1}{\sqrt{10}}\right)}$$